

Wie viel Geld ist es?



100 50 20 20 5 2 20 1 10

Blank space for answer

100 100 50 10 2 1/2 1/2 5 5 10 20

Blank space for answer

200 200 100 50 50 20 5 2 2 1 5

Blank space for answer

Lösung: Wie viel Geld ist es?



Banknotes: 100 (blue), 50 (green), 20 (red), 20 (red).
Coins: 5 (grey), 2 (grey), 20 (grey), 1 (grey), 10 (grey).

198 Fr. 30 Rp.

Banknotes: 100 (blue), 100 (blue), 50 (green), 10 (orange).
Coins: 2 (grey), 1/2 (grey), 1/2 (grey), 5 (yellow), 5 (yellow), 10 (grey), 20 (grey).

263 Fr. 40 Rp.

Banknotes: 200 (green), 200 (green), 100 (blue), 50 (green), 50 (green), 20 (red).
Coins: 5 (grey), 2 (grey), 2 (grey), 1 (grey), 5 (yellow).

630 Fr. 5 Rp.

Wie viel Geld ist es?



200 200 100 100 50 20 10

2 1 20 10 1/2 1/2 5

100 100 50 10 10 10 10

1/2 1/2 2 5 5 10 20

200 200 100 50 50 20

5 2 10 1 10 1/2 5 10 10 10

Lösung: Wie viel Geld ist es?



Banknotes: 200 (2), 100 (2), 50 (1), 20 (1), 10 (1)

Coins: 2 (1), 1 (1), 20 (1), 10 (1), 5 (1), 1/2 (2)

684 Fr. 35 Rp.

Banknotes: 100 (2), 50 (1), 10 (4)

Coins: 5 (2), 20 (1), 10 (1), 2 (1), 1/2 (2)

293 Fr. 90 Rp.

Banknotes: 200 (2), 100 (1), 50 (2), 20 (1)

Coins: 5 (2), 2 (1), 10 (3), 1 (1), 1/2 (1), 10 (2), 5 (1)

633 Fr. 95 Rp.

Wie viel Geld ist es?



Banknotes: 200, 50, 100, 10, 20, 100

Coins: 1, 2, 5, 10, 20, 1/2

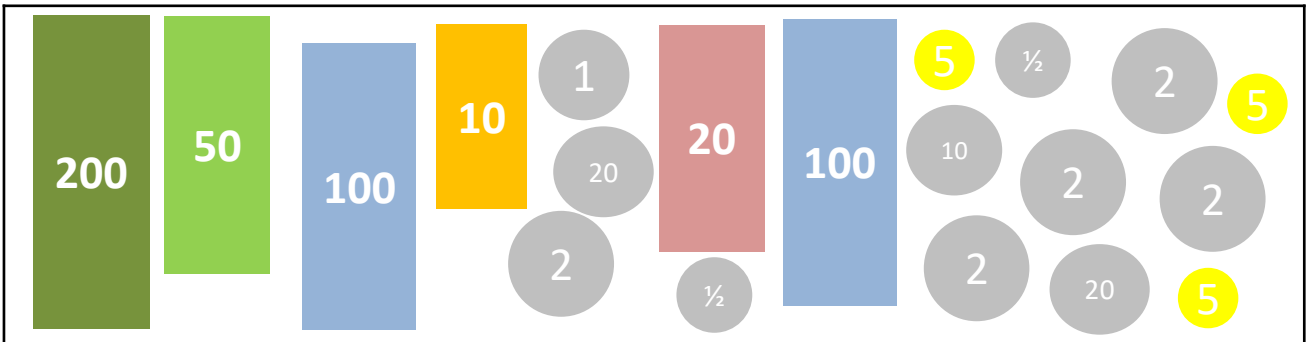
Banknotes: 100, 10, 50, 10, 1000, 20, 200, 100

Coins: 20, 1/2, 2, 1/2, 1/2, 10, 5

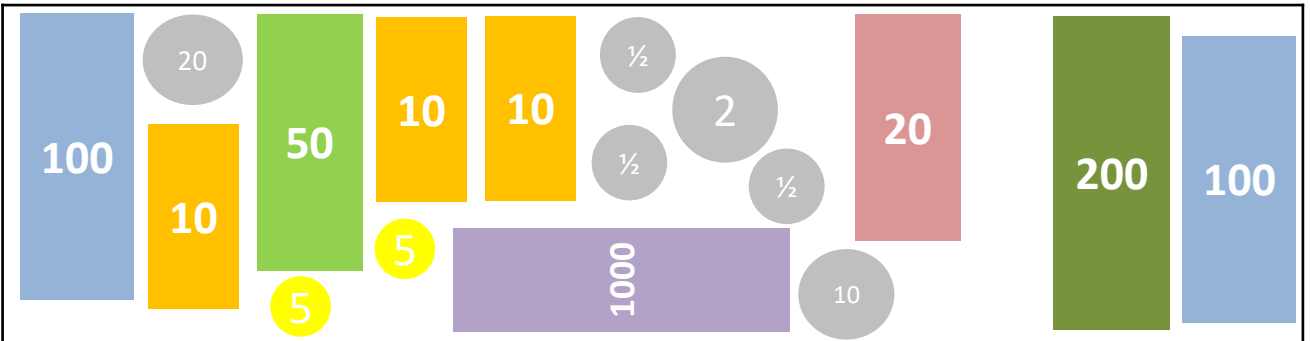
Banknotes: 200, 100, 20, 20, 50, 200, 50, 10

Coins: 2, 2, 10, 1, 10, 1/2, 5, 10

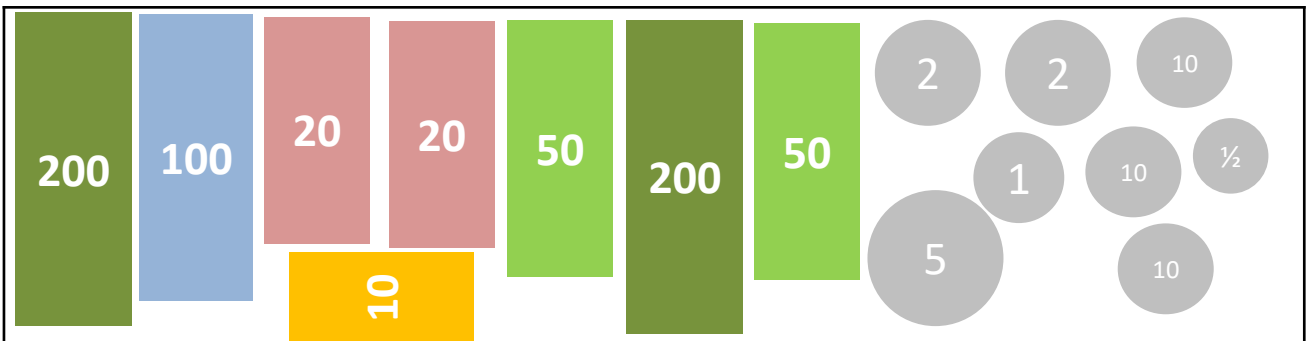
Lösung: Wie viel Geld ist es?



492 Fr. 65 Rp.



1503 Fr. 90 Rp.



660 Fr. 80 Rp.