

Schreibe die Nachbarzahlen hin: ★

□ 8 □

□ 2 □

□ 6 □

□ 5 □

□ 9 □

□ 1 □

□ 7 □


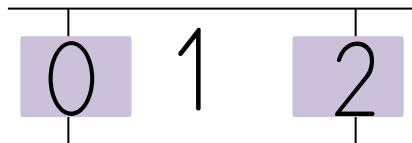
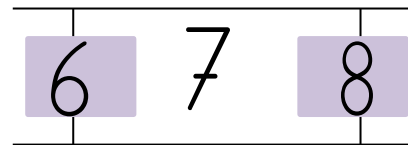
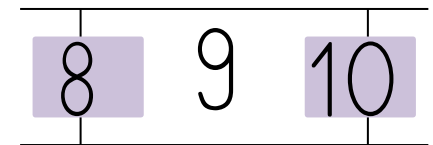
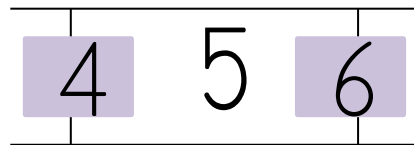

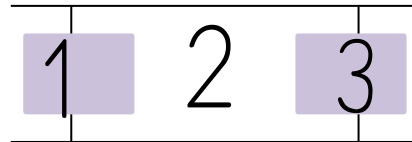
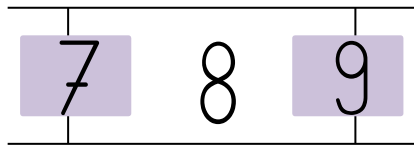
□ 10 □

□ 4 □

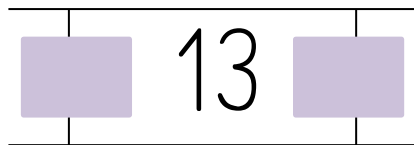
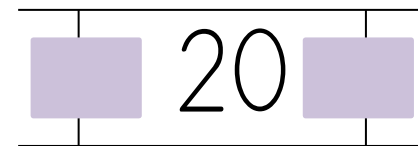
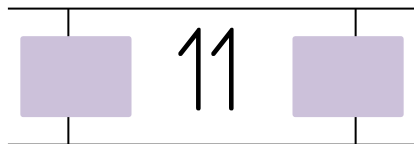
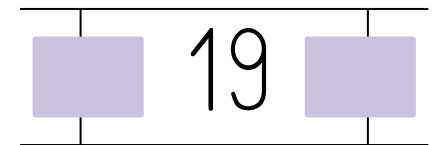

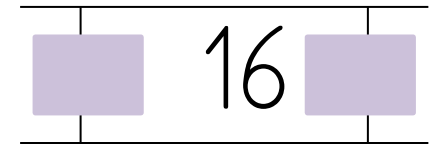

□ 11 □

□ 3 □

Schreibe die Nachbarzahlen hin: ★



Schreibe die Nachbarzahlen hin: ★★



Schreibe die Nachbarzahlen hin: ★★

17 18 19

11 12 13

15 16 17

14 15 16

18 19 20

10 11 12

16 17 18

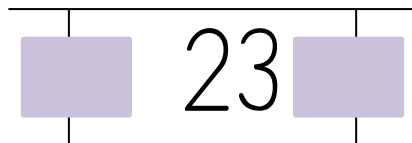
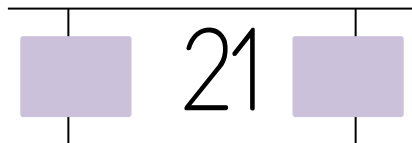
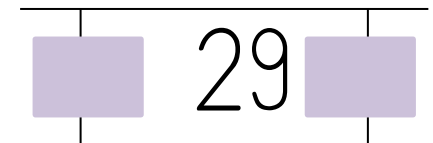
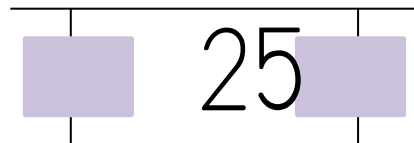
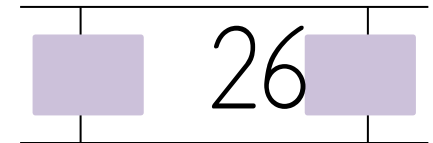
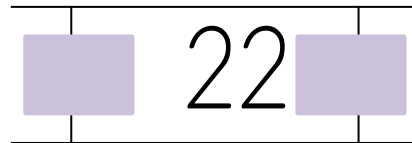
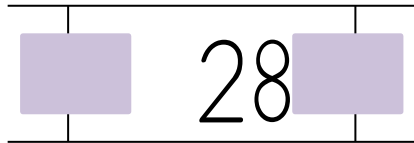
20 21 22

13 14 15

19 20 21

12 13 14

Schreibe die Nachbarzahlen hin: ★★



Schreibe die Nachbarzahlen hin: 

